



**TAGORE INTERNATIONAL SCHOOL  
VASANT VIHAR, N.DELHI  
HOLIDAYS HOMEWORK  
CLASS- III (2020-21)**



**“Happiness is about being nice and spreading love all around the world”  
Anonymous**

Dear students

The secret to happiness is to make everyone around you happy. Your smile embodies happiness, purity and joy. Be happy, smile more often; it brightens the day of the people around you.

**Let's make some happy memories-**

- ❖ Get up early and do some exercise at home.
- ❖ Converse with your friends and family in English.
- ❖ Read books and find new words.
- ❖ Make sure that the whole family has one meal together.
- ❖ Take good care of your health and hygiene. Avoid heavy, oily food and increase intake of fresh fruits and drink water to keep yourself well hydrated and energetic.
- ❖ Keep a bowl of water for birds this summer. Replenish it regularly.
- ❖ Make a note of a good deed that you do daily in your English notebook.. (It can be helping your mom in keeping the vegetables or watering the plants)



Summer holidays are the best time for to enliven your spirit of adventure and give vent to your imagination and creativity indoors as well as outdoors. Holiday homework provides the perfect opportunity to keep yourselves challenged and stimulated. As you grow up, activities become a more important part, allowing you to develop vital skills.

## SECTION A

We usually love to visit places during the summer break, but due to the pandemic COVID-19, we won't be able to go out and visit them. So here we are with some interesting and amazing virtual trips, which will help you to enrich your knowledge and explore the destination.

### **1. The first virtual tour - Explore Taj Mahal**

<https://www.taj-mahal.net/newtaj/>

Based on the virtual trip to Taj Mahal complete the following activities -



#### a. Creative writing

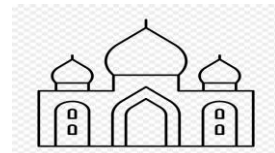
[https://drive.google.com/open?id=1HeZP\\_eSxzJkVHFIn78gOo-Mh1QCpXTh](https://drive.google.com/open?id=1HeZP_eSxzJkVHFIn78gOo-Mh1QCpXTh)

#### Comprehension

[https://drive.google.com/open?id=1a\\_GLqQBA2m9FBOFTRa9mOz\\_k\\_FXrEtUq](https://drive.google.com/open?id=1a_GLqQBA2m9FBOFTRa9mOz_k_FXrEtUq)

b. The Taj Mahal is perfectly symmetrical. Its minarets, walls, rooms and even gardens follow a perfect symmetry. Open the link given below and learn how to draw Taj Mahal on A 4 size sheet. Start by folding the sheet into two equal parts. Open it and imagine a dotted line going down the middle of the Taj Mahal. Then follow the steps given in the link.

❖ <https://forms.gle/tRkThdegVzzynqF59>



c. Our monuments are our cultural heritage. Make a poster on 'Save the Monuments'. Express your views through cartoons and drawings. Don't forget to give it a tagline.

d. (Hindi)

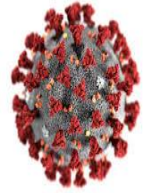
[https://drive.google.com/open?id=10\\_4vp4cbKmOnlzCvcqNH9r7X6h3bZkc](https://drive.google.com/open?id=10_4vp4cbKmOnlzCvcqNH9r7X6h3bZkc)

ताज महल से जुड़ी अपनी पसंदीदा कोई एक चीज़ बनाइए और सजाइए जैसे कागज़ या कपड़े का थैला बुक मार्क उपहार का डिब्बा आदि।

## SECTION B

### Observe and draw:

Make a scrapbook of drawings on any **four** given observations, during Covid-19 lockdown.



- My day during the lockdown.
- Each family member doing different chores.
- Frontline workers.
- Nature and the Earth.
- The look of the city.
- The precautions taken by the people during the pandemic indoors and outdoors.
- the leisure activity a family member indulged in during the lockdown period.





**TAGORE INTERNATIONAL SCHOOL**  
**VASANT VIHAR, NEW DELHI**  
**SUBJECT - MATHEMATICS**  
**CLASS - III**  
**WORKSHEET NO - 1**

Name \_\_\_\_\_ Sec \_\_\_\_\_ Date \_\_\_\_\_

Q1. Read the questions carefully and choose the correct options.

A) The place value of 2 in the digit 5,028 is:

- (i) 2                      (ii) 20                      (iii) 2,000                      (iv) 200

B) The face value of 5 in the digit 3,657 is:

- (i) 5,000                      (ii) 5                      (iii) 50                      (iv) 05

C) One more than 7,654 is:

- (i) 7,653                      (ii) 7,650                      (iii) 7,655                      (iv) 7,700

D) Ten less than 1,274 is:

- (i) 1,264                      (ii) 1,275                      (iii) 1,270                      (iv) 1,273

E) The standard form of  $8,000 + 500 + 00 + 1$  is:

- (i) 8,500                      (ii) 8,501                      (iii) 8,000                      (iv) 8,510

F) The standard form of three thousand three is :

- (i) 3,300                      (ii) 3,000                      (iii) 3,030                      (iv) 3,003

G) The expanded form of two thousand five hundred seventy two is:

(i)  $2,000 + 200 + 70 + 2$

(ii)  $2,000 + 500 + 20 + 7$

(iii)  $2,000 + 700 + 50 + 2$

(iv)  $2,000 + 500 + 70 + 2$

H) Which digit has 4 in the hundreds place?

(i) 4,506

(ii) 4,400

(iii) 6,784

(iv) 4,044

I) Which digit has 8 in the ones place?

(i) 6,008

(ii) 6,080

(iii) 6,800

(iv) 6,880

QII. Write the largest 4-digit number.

--

QIII. Write the least 4-digit number.

--

QIV. Arrange the following numbers in descending order.

A) 4,352 / 2,250 / 5,230 / 2,050

--	--	--	--

B) 7,000 / 7,007 / 7,777 / 7,077

--	--	--	--



**TAGORE INTERNATIONAL SCHOOL**  
**VASANT VIHAR, NEW DELHI**  
**SUBJECT - MATHEMATICS**  
**CLASS - III**  
**WORKSHEET NO - 2**

Name \_\_\_\_\_ Sec \_\_\_\_\_ Date \_\_\_\_\_

Q1) Answer the following questions based on the given table

8,436	7,463	3,209	7,263
6,432	1,006	4,551	9,073
7,777	2,300	6,677	8,849
2,460	2,727	2,319	5,000

- a. A number that lies between 3,000 and 4,000 is \_\_\_\_\_
- b. A number smaller than 2,000 \_\_\_\_\_
- c. A number bigger than 9,000 \_\_\_\_\_
- d. A number than has 5 tens \_\_\_\_\_
- e. A number that is 100 less than 2,400 \_\_\_\_\_
- f. A number that is 10 more than 4,541 \_\_\_\_\_

Q2) Write the numbers in standard form.

a.  $6,000 + 700 + 80 + 1 =$  \_\_\_\_\_

b.  $2,000 + 700 + 10 + 4 =$  \_\_\_\_\_

c.  $5,000 + 800 + 20 + 3 =$  \_\_\_\_\_

d.  $4,000 + 500 + 00 + 2 =$  \_\_\_\_\_

e.  $1,000 + 800 + 80 + 5 =$  \_\_\_\_\_

f.  $3,000 + 000 + 00 + 3 =$  \_\_\_\_\_

g.  $8,000 + 500 + 40 + 2 =$  \_\_\_\_\_

h.  $7,000 + 800 + 90 + 5 =$  \_\_\_\_\_

i.  $2,000 + 100 + 40 + 8 =$  \_\_\_\_\_

j.  $1,000 + 600 + 40 + 8 =$  \_\_\_\_\_

k.  $1,000 + 700 + 50 + 7 =$  \_\_\_\_\_

l.  $5,00 + 000 + 60 + 8 =$  \_\_\_\_\_

m.  $7,000 + 400 + 10 + 9 =$  \_\_\_\_\_

n.  $8,000 + 000 + 80 + 0 =$  \_\_\_\_\_

o.  $5,000 + 000 + 70 + 3 =$  \_\_\_\_\_



**TAGORE INTERNATIONAL SCHOOL**  
**VASANT VIHAR, NEW DELHI**  
**SUBJECT - MATHEMATICS**

**CLASS - III**

**WORKSHEET NO – 3**

Name \_\_\_\_\_ Sec \_\_\_\_\_ Date \_\_\_\_\_

Q1. Is the number even or odd?

1. 5556

EVEN

ODD

2. 7667

EVEN

ODD

3. 1335

EVEN

ODD

4. 5550

EVEN

ODD

5. 3443

EVEN

ODD

6. 9006

EVEN

ODD

7. 3987

EVEN

ODD

8. 9992

EVEN

ODD



QII. Choose the correct answer.

**1.** Digits 0,2,4,6 or 8 come at the end of which numbers?

a)  even

b)  odd

**2.** Digits 1,3,5,7 or 9 come at the end of which numbers?

a)  even

b)  odd

**3.** The next even number that comes after 5664 is

a)  5665

b)  5666

**4.** The next odd number that comes after 1009 is

a)  1011

b)  1099

**5.** The even number that comes between 4445 and 4447 is

a)  4449

b)  4446

## SECTION D

Learn words given below. Read them aloud with correct pronunciation. Try to use them in your conversation with family and friends.



add sum more than increased by together electricity

witch broom cauldron closet scampered pleaded willow tree

moaned because different spell brew gurgled soaked eager Halloween

friend neighbour domestic drag pulley machine force windmill

difficult where what between match complete choose vocabulary

सुगंध हरियाली क्योंकि लेकिन हिस्सा व्यवहार घमंडी मिठाई चिल्लाए  
इसलिए


### ❖ Suggested children's audio books for reading

- <http://www.storynory.com/archives/fairy-tales/>
- <https://audioboom.com/channel/baalgatha>




### ❖ Suggested Books for reading (Any two)

- Be a Friend — Salina Yoon
- It's Okay to Be Different — Farrah.C
- Panchtantra Ki Kahaniyaan Hindi-SuveerKaul Publisher: Scholastic
- Ek Mein Do Hindi-Gulzar Publisher: Scholastic



### ❖ Suggested movies to Watch (Any two)

- A dog's journey
- How to train your dragon – The hidden world
- Jumbo 2 – The return of the big elephant (Hindi)
- The Snow Queen (Animation Hindi)



**Preserve all the work in a simple envelope/ bag made of newspaper or paper. Reference link on how to make a paper/newspaper bag is given below. Kindly keep the work safely. The work will need to be submitted once the school reopens.**

**<https://www.youtube.com/watch?v=M0yZwfiNuUI>**



Be so **HAPPY** that when  
others see you, they  
become **HAPPY** too!